

CBT CLASS 4 AUGUST

CBT QUESTIONS

Class : IV

Subject: Maths

For the month of July

1. 200 is less than 1000 -----.

- (a) 600 (b) 1200 (c) 800 (d) 400

Ans:- (c) 800

2. 38 more than 112 is -----.

- (a) 74 (b) 150 (c) 138 (d) 112

Ans:- (b) 150

3. 6 times 50 is -----.

- (a) 30 (b) 500 (c) 600 (d) 300

Ans:- (d) 300

4. 30 students can sit in a bus. How many buses are needed to sit 240 children?

- (a) 9 buses (b) 10 buses (c) 6 buses (d) 8 buses

Ans:- (d) 8 buses

5. A water tank takes 45 minutes to fill it with water. How much time it take to fill 4 such water tank?

- (a) 2 hours (b) 1 hours (c) 3 hours (d) 4 hours

Ans:- (c) 3 hours

6. Anuj wants to buy 1 kg tomatoes for 45 rupees and 6 oranges for 18 rupees. How much money will be need to buy the things.

- (a) 98 (b) 63 (c) 36 (d) 45

Ans:- (b) 63

7. What date will it be, before 6 days before republic day?

- (a) 30 january (b) 16 january (c) 6 january (d) 20 january

Ans:-(d) 20 January

8. How will we write 7 pm in 24 hours clock?

- (a) 12 hours (b) 17 hours (c) 19 hours (d) 23 hours


Ans:- (c) 19 hours

9. What time will it be- 45 minutes before 01:05 am?

- (a) 12:20 pm (b) 1.50 am (c) 12.20 am (d) 1.50 pm

Ans:- (c) 12.20 am

10. What time is shown in the given clock?



- (a) 11:10 (b) 1:55 (c) 11:02 (d) 1:50

Ans:-(b) 1:55

CBT QUESTIONS

Class : IV

Subject: EVS

For the month of July

OBSERVATION AND REPORTING

Q.1 The group of elephants is called



- (a) flock
(b) herd
(c) group

(d) troupe

Ans:- (b) herd


Q.2 Identify the picture which you seen on railway station.



- (a) Postman
- (b) Police Officer
- (c) Doctor
- (d) Ticket Checker

Ans:- d) Ticket Checker

Q.3 Look at the picture of Given railway ticket and select correct statement about it.

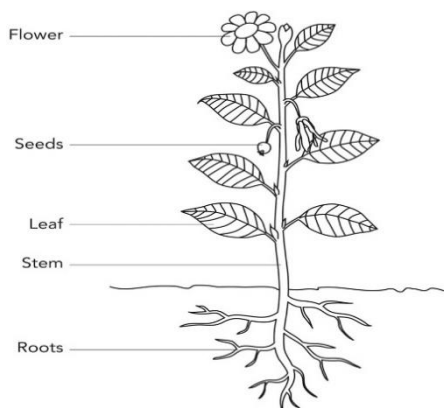


- (a) The Date of ticket is 19/8/2020.
- (b) The ticket fair is Rs. 15/-
- (c) This is a platform ticket.
- (d) This is valid for 18 hours.

Ans:-(c) This is a platform ticket.

IDENTIFICATION AND CLASSIFICATION

Q.4 Honey bee collect nectar from which part of plant?



- (a) Leaves
- (b) Seed
- (c) Flower
- (d) Root

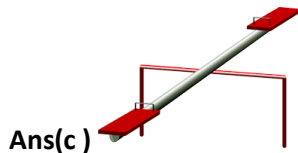



Ans:- (c) Flower

Q.5 Smoke from factories, cars and burning of garbage causes_____?.

- (a) Air pollution
- (b) Water pollution
- (c) Soil pollution
- (d) Noise pollution

Ans:- (a) Air pollution

Q.6 Which of the following best represents the example of pulley?



Q.7 Identify the picture of plant which need less water to grow.



- (a) Water lily
- (b) Cactus
- (c) Banyan
- (d) Grass

Ans:- (b) Cactus

DISCOVERY OF FACTS

Q.8 Plant should be planted on road side because

- (a) They provide shade .

(b) They reduce air pollution.

(c) Both (a) & (b) correct

(d) Only (a) is correct

Ans:- (c) Both (a) & (b) correct

Q.9 Egret sits on buffalo to eat insects from the skin of buffalo.



Tick correct statement about given picture.

(a) Both (c) and (d) are correct.

(b) Egret harms buffalo.

(c) Egret Help Buffalo to remove insects from it,s body.

(d) Buffalo provide food to egret.

Ans:- (a) Both (c) and (d) are correct

Q.10 Which of the following is a food chain?

(a) FROG → SNAKE → MAN

(b) GRASS → GOAT → LION

(c) CAT → RAT → MOUSE

(e) PLANT → GOAT → ELEPHANT

Ans:- b) GRASS → GOAT → LION